

UNIVERSITY OF MARYLAND
Department of Physics
College Park, Maryland

PHYSICS Ph.D. QUALIFYING EXAMINATION
PART II

August 28, 2015

9:00 a.m. – 1:00 p.m.

**Do any four problems. Each problem is worth 25 points.
Start each problem on a new sheet of paper (because different
faculty members will be grading each problem in parallel).**

**Be sure to write your Qualifier ID (“control number”) at the
top of each sheet — not your name! — and turn in solutions to
four problems only. (If five solutions are turned in, we will
only grade # 1 - # 4.) For whichever problem (or problems)
you skip, fill in a placeholder form so that the grader for that
problem will have something from every student.**

You may keep this packet with the questions after the exam.

Problem II.1

- (a) [6 points] Consider a one-dimensional simple harmonic oscillator: a particle with mass m bound to a quadratic potential $V = \frac{1}{2}kx^2$. Show by explicit calculation that
- $$\langle u_n | \frac{1}{2m}p^2 | u_n \rangle = \langle u_n | \frac{1}{2}kx^2 | u_n \rangle$$
- holds for the eigenstates $|u_n\rangle$, which are normalized in the usual way.
- (b) [6 points] Write down the Hamiltonian for a system in which there are two non-identical particles (of mass m_1 and m_2) moving in one dimension and interacting via a quadratic potential $V = \frac{1}{2}k(x_2 - x_1)^2$, where x_1 is the position of the first particle and x_2 is the position of the second particle. Find the energy of the ground state and its wavefunction in coordinate space.
- (c) [7 points] Explain how the energy and wavefunction of the ground state would be modified if the system in part (b) was composed of two *identical* spin $\frac{1}{2}$ particles.
- (d) [6 points] Now add a spin-spin interaction between the identical spin $\frac{1}{2}$ particles given by $\alpha(x_2 - x_1)^4 \boldsymbol{\sigma}_1 \cdot \boldsymbol{\sigma}_2$, where α is a small positive constant and $\boldsymbol{\sigma} = \sigma_x \hat{\boldsymbol{x}} + \sigma_y \hat{\boldsymbol{y}} + \sigma_z \hat{\boldsymbol{z}}$. Using perturbation theory, find the energy of the ground state to first order in α .

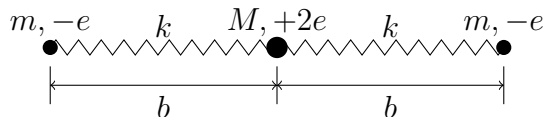
Possibly useful information: $\int_{-\infty}^{\infty} y^4 e^{-y^2} dx = 3\sqrt{\pi}/4$.

$$a^\dagger = \sqrt{\frac{m\omega}{2\hbar}} \left(x - \frac{ip}{m\omega} \right)$$

$$a = \sqrt{\frac{m\omega}{2\hbar}} \left(x + \frac{ip}{m\omega} \right)$$

Problem II.2

Consider a linear triatomic molecule with ions constrained to move only along the axis of the molecule (which can be taken as the x -axis). The molecule consists of two ions of mass m and charge $-e$ that are symmetrically located at either side of an ion of mass $M = 2m$ and charge $+2e$ at equilibrium. The complicated forces between the ions are approximated by two springs with spring constant k , and equilibrium length b , as shown in the figure.



- (a) [2 points] Write down the Hamiltonian for this system of three coupled masses.
- (b) [4 points] Show that the following transformation

$$\begin{aligned} x_1 &= \frac{1}{2}(Q_B - \sqrt{2}Q_A) \\ x_2 &= -\frac{1}{2}Q_B \\ x_3 &= \frac{1}{2}(Q_B + \sqrt{2}Q_A) \end{aligned}$$

simplifies both the kinetic and the potential energies and eliminates the center-of-mass motion.

- (c) [8 points] Q_A and Q_B are normal-mode coordinates describing the internal vibrations of the molecule. These modes satisfy

$$Q_j(t) = Q_j(0)e^{i\omega_j t}, \quad j = (A, B).$$

Describe the motion of the ions in each of the normal modes. Determine the oscillation frequencies ω_j and the electric dipole moments D_j for the two internal modes.

The molecule is actually a quantum mechanical system. Initially it is in its ground state; it is then subjected to a *weak* uniform electric field $E_x(t) = E_0(\omega) \cos(\omega t)$. The perturbing interaction between its dipole moment and the electric field is $H' = -DE_x$, where D is the electric dipole moment and E_x is the electric field component along the molecule. The transition probabilities $P_j(\omega, t)$ for excitation of states with one quantum either in mode A or in mode B is

$$P_{0j}(\omega, t) = \frac{|V_{0j}|^2 \sin^2[(\omega_{0j} - \omega)t/2]}{\hbar^2 (\omega_{0j} - \omega)^2},$$

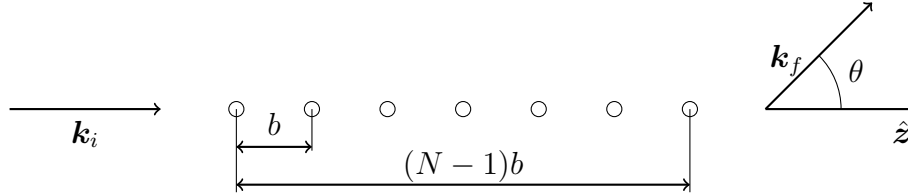
where $|V_{0j}|^2$ is the matrix element of the perturbing Hamiltonian, and in this case is $|V_{0j}|^2 = |D_j E_0(\omega)|^2$ for mode j of frequency ω_{0j} .

- (d) [**3 points**] Use the equation above to obtain expressions for $P_{0A}(\omega, t)$ and $P_{0B}(\omega, t)$.
- (e) [**8 points**] Determine the transition rates $R_j = \frac{d}{dt} \int d\omega P_{0j}(\omega, t)$, for a uniform incoherent beam of radiation propagating in the z -direction and polarized along x , whose intensity per frequency interval is given by $J(\omega) = \frac{1}{2}c\epsilon_0 |E_0(\omega)|^2$, where c is the speed of light in vacuum and ϵ_0 is the permittivity of free space. Assume that $J(\omega)$ depends weakly on frequency.

Possibly useful information: $\int_{-\infty}^{\infty} \frac{\sin^2 x}{x^2} dx = \pi$.

Problem II.3

Consider diffraction of quantum particles of wavevector \mathbf{k}_i on a system of N identical scatterers located a distance b apart along the direction of incidence $\hat{\mathbf{z}}$, as shown in the figure below.



Each individual scatterer is characterized by a potential $U_0(r)$ and the corresponding Born amplitude of scattering $f_0(\theta)$, which is assumed to be a smooth, featureless function.

- (a) [**3 points**] First consider the case of only one scatterer ($N = 1$). In the Born approximation, express the amplitude $f_0(\theta)$ and the differential cross section $d\sigma_0/d\Omega$ of scattering in terms of $U_0(r)$ and k .
- (b) [**6 points**] Now consider N scatterers. The total potential is

$$U(\mathbf{r}) = \sum_{n=0}^{N-1} U_0(|\mathbf{r} - nb\hat{\mathbf{z}}|),$$

where $\hat{\mathbf{z}}$ is the unit vector along the z axis.

In the Born approximation, calculate the amplitude $f(\theta)$ and the differential cross section $d\sigma/d\Omega$ of scattering in terms of $f_0(\theta)$, k , b , and N .

Explore the answer obtained in Part (b) for various values of kb as follows:

- (c) [**4 points**] What are $f(\theta)$ and $d\sigma/d\Omega$ in the limit $Nbk \ll 1$? Interpret the result.

In the case of $kb \geq 1$ and $N \gg 1$, answer the following questions and give geometrical interpretations of your results:

- (d) [**4 points**] Sketch $d\sigma/d\Omega$ as a function of θ . Calculate the angles θ_n at which $d\sigma/d\Omega$ has strong maxima.
- (e) [**4 points**] What is the total number of strong maxima for a given value of kb ?
- (f) [**4 points**] Discuss how the height and the width of a strong maximum depend on $N \gg 1$. The width $\Delta\theta_n = 2\delta\theta_n$ is determined by the angles $\theta_n \pm \delta\theta_n$ where $d\sigma/d\Omega$ vanishes.

Useful formula:

$$\sum_{n=0}^{N-1} a^n = \frac{a^N - 1}{a - 1}.$$

Problem II.4

Two particles interact via a spin-spin Hamiltonian term $A\mathbf{S}_1 \cdot \mathbf{S}_2$, where A is a positive constant and $\mathbf{S}_{1,2}$ are the spin angular momenta of the two particles. Particle 1 has spin 1 and magnetic moment $\mu_1 = -\frac{\mu_B}{\hbar}\mathbf{S}_1$, whereas particle 2 has spin $\frac{1}{2}$ and zero magnetic moment.

- (a) [**6 points**] What are the energy levels of this system and the degree of degeneracy of the levels?
- (b) [**8 points**] Write down the energy eigenstates corresponding to the different energy levels in part (a), as linear superpositions of products of single-particle spin states.

Now consider what happens when the system is in a magnetic field of strength B .

- (c) [**4 points**] What are the approximate energy eigenstates and eigenvalues if $B \gg \frac{A\hbar^2}{\mu_B}$?
- (d) [**7 points**] Sketch the approximate energy eigenvalues as functions of $0 < B \lesssim \frac{A\hbar^2}{\mu_B}$, and label the appropriate states. *Do not neglect the spin-spin interaction term from parts (a) and (b).*

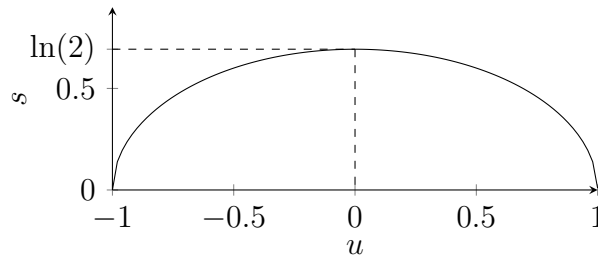
Possibly useful information: $J_{\pm}|j, m\rangle = \sqrt{j(j+1) - m(m \pm 1)}|j, m \pm 1\rangle$

Problem II.5

The notion of negative absolute temperature is unusual but it can occur in, for example, quantum spin systems. To see this, consider a quantum system of N noninteracting magnetic dipoles each with spin $1/2$, having a magnetic moment μ_B , placed in a magnetic field \mathbf{B} . Assume a canonical ensemble description of this spin system with a temperature $T = 1/(k\beta)$, where k is Boltzmann's constant.

- (a) [**3 points**] Write down the energy ϵ of this two-level system in terms of μ_B and B (the magnitude of the magnetic field). Determine the partition function Z_N in terms of $\beta\epsilon$.
- (b) [**9 points**] Calculate the free energy F , the entropy S , and the internal energy U of this system as a function of N and β .

A schematic plot of $s \equiv \frac{S}{Nk}$ versus $u \equiv \frac{U}{N\epsilon}$ is provided in the figure below to aid you in answering the following questions:



- (c) [**4 points**] What is the temperature T of the magnetic system in terms of quantities you obtained in part (b)? Indicate in the figure: (i) the places where $T = 0$, (ii) the region where negative temperature $T < 0$ appears, (iii) indicate with one arrow on each branch the direction of increasing T , and (iv) what is the temperature at the global maximum of that curve?
- (d) [**6 points**] Plot the temperature parameter $\theta = kT/\epsilon$ on the vertical axis versus u (from -1 to $+1$) on the horizontal axis. (i) place an arrow along the curves indicating the directions of decreasing temperature. (ii) Explain what energy state the system is in at $T = 0$. (iii) If a system of this nature at $T = -300K$ somehow interacts with an identical system at $T = 300K$, what is the final equilibrium temperature?
- (e) [**3 points**] Name two necessary conditions for a system to manifest negative temperature.